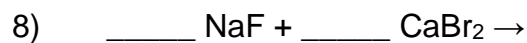
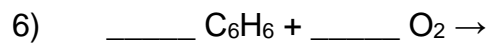
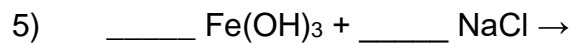
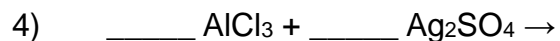
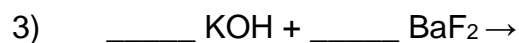
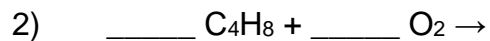
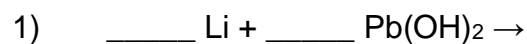


Predicting Reaction Products II

Determine whether each of the following chemical reactions will occur. If they will, indicate the products of the reaction. If they will not, explain why not.



Predicting Reaction Products II

Determine whether each of the following chemical reactions will occur. If they will, indicate the products of the reaction. If they will not, explain why not.

